

QUANTI SONO?



6



1

0



8




4



9

SCHEDA N. 2



QUANTI SONO?



6



9



8



3




7

1

(Emi)Lia Venturato (maestremilia.altervista.org)



SCHEDA N. 3



QUANTI SONO?



9



8



7




3



1 0

1



QUANTI SONO?



5



4



7




3



8


SCHEDA N. 5



QUANTI SONO?



8



4



9




3



2

1



QUANTI SONO?



8



4




9



8



7



QUANTI SONO?



6



4




8



8



7



QUANTI SONO?



5



9




4



6



7



QUANTI SONO?



1	0
---	---



6




9



6



5



QUANTI SONO?



9



6



7



8



6